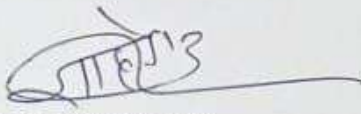


Sipna Shikshan Prasarak Mandal, Amravati  
Arts, Science and Commerce College, Chikhaldara  
**Career Guidance Cell**  
(Career Counseling and Guidance Cell)  
(2023-2024)

## Science Aptitude Test

### REPORT

- Objectives:** To present science in interesting way before students.  
To increase interest of students of Arts and Commerce faculty in Science
- Date & Time:** 21.01.2024/2.00 to 3.00 pm
- Participants:** 78
- Question Paper:** 60MCQ's based on Science and Technology
- Mode:** Online through Google form  
Google form link: <https://forms.gle/43XTJPuDFdMDi6ZPA>
- Toppers:** First- Ku. Vaishnavi Kurhekar (B.Sc. II)  
Second- Ku. Shwetal Sudesh Shahare (B.Sc.II)  
Third- Arpita Vijay Chavan (M.Sc. I)
- Awards:** Trophies for Toppers and Cash Prize
- Documents:** Google form answer sheet  
Google form link

  
Dr. D.S. HEDA00  
CO-ORDINATOR

**CAREER GUIDANCE CELL**  
ESTD : 2003  
Arts, Science and Commerce College  
Chikhaldara

  
Dr. R.S. JAIPURKAR

**PRINCIPAL**  
Arts, Science & Commerce College  
Chikhaldara

## Notice - 05

Page No.

Date 15 01 2024

All the teachers and students, hereby informed that following activities are arranged as per given schedule.

Sr.No.	Activity	Date	Time
01	G.K. Test	21.01.2024	01.00 - 2.00 pm
02	Science Aptitude Test	21.01.2024	02.00 - 3.00 pm
03	Essay Test.	<del>22.01.2024</del> 09.02.2024	<del>12.15 - 1.15 pm</del> 04.00 - 5.00 pm.


Please Note:

- G.K. Test <sup>Science Aptitude Test</sup> will be conducted online through Google form.
- Essay Test will be conducted offline.

All the students are expected to appear for these activities and all the teachers are requested to co-operate for the related work.

- Teachers have to send Google form Link of G.K. Test & Science Aptitude Test to their 'Palya students'.

The links of these tests will be uploaded on "ASC Chikhaldara" WhatsApp group and you have to send these to your 'Palya students'.

  
CO-ORDINATOR

**CAREER GUIDANCE CELL**

ESTD : 2003

Arts, Science and Commerce College  
Chikhaldara

M/L

**PRINCIPAL**  
Arts, Science & Commerce  
College, Chikhaldara

## Career Guidance Cell

(Career Guidance and Counseling Cell)  
(2023-2024)

### SCIENCE APTITUDE TEST

#### MARKSHEET

Score	Name of Students	Class
	Mohammad Taufiq	
15 / 60	Mohammad Rafiq	1 year
16 / 60	Sarthak	B.com 1 St year (2) semester
20 / 60	Shital gorelal kale	BA
9 / 60	Gaurav Jitendra Agrawal	Bsc 1
12 / 60	Sachin Vilas Metange	Bsc 1
16 / 60	Pawan shamlal mawaskar	Bsc.2year
17 / 60	Vaishnavi ghormade	Fainal year
15 / 60	Vaibhav Gajanan Raut	Bcom 2nd year
15 / 60	Sonali sukhdev jawarkar	Bsc 1
	Rushikesh Ramcharan	
25 / 60	Dammale	b.sc 1st year
13 / 60	vaibhav rajju darsimbe	b.a second year
15 / 60	Abhishek athole	b.com 2
41 / 60	Darshana Dhale	BSC 3rd year
18 / 60	Shital gorelal kale	BA 2
19 / 60	Sachin	BAI
21 / 60	Rupali motilal bethekar	Bcom 1st year
15 / 60	Durga hiralal dhnde	BA2
16 / 60	Dhananjay Mohod	Bsc
45 / 60	Yash Nilesh Gaurkhede	B.Sc.
15 / 60	Abhishek athole	b com 2
	Taqaddas Ammara Syed	
18 / 60	Ahmed Ali	Bsc 2 year
14 / 60	Vaibhav Gajanan Raut	B.com II
26 / 60	Sandhya shyamkishor bilve	Bsc second year
22 / 60	Sakshi raju jog	Ba 2
12 / 60	Ritesh Ramesh kasdekar	BA second year
20 / 60	Manisha mahadev selukar	M sc II year
20 / 60	Manav Sushil Belkar	Bsc 2 nd year Semester-4
10 / 60	Pravin bhau kasdekar	B com 1 year
25 / 60	AJAY BHAIYALAL JAMKAR	B.A First Year
17 / 60	Sandip Sonaji Dhikar	B.A1
14 / 60	Abhishek Manu Darsimbe	Bsc III year




12 / 60	Shreyash Sonar	BSC-II (Semester -4
24 / 60	Toufik afsar khan	B.A 1
25 / 60	VISHAL DEVANAND TAYDE	BA
25 / 60	Rohan kishor Lokhande	BA-1
15 / 60	Neha mavaskar	B.A 2
14 / 60	Komal Sakharam dhande	B.sc 2
15 / 60	Dipali sonaji kale	Bsc2
47 / 60	Shwetal Sudesh Shahare	B.sc.2
12 / 60	Sachin Vilas Metange	BSC 1
21 / 60	Rahul ramesh kasdekar	Bsc 2
20 / 60	Sushila Ganesh belsare	B.sc second year
17 / 60	Aruna Hiraman Zamarkar	BA third year
46 / 60	Bhumika Gopal sable	1st year
15 / 60	Ritesh Ramesh kasdekar	BA 2 Year
4 / 60	Om shudhirrao kale	BSC 1sr year
19 / 60	Karishma drararam Bhilavekar	B.A1
17 / 60	Gomaji Rona Kasdekar	B.A. 1
34 / 60	Ved Bajpeyee	Bsc 1st year (sem 2)
14 / 60	Kavita Munna bhilavekar	B.a
12 / 60	Kaif Shaha	BSC computer
37 / 60	Khushi shailesh malviya	B.sc II
19 / 60	Rahul Rajaram Bethekar	B.sc 3 rd year
20 / 60	Gaurav Ramu Zarekar	Bs.c3
19 / 60	Satish sukhahal dhikar	B a th2
20 / 60	Mohammad nadeem	Bsc 1 year
17 / 60	Roshan Champalal Belsare	B. A 1
28 / 60	Gauri Dinkar Bhongade	Bsc 2nd year
19 / 60	Rohit potekar	Bsc.1
28 / 60	Sharda goma bhilavekar	B.A
47 / 60	Arpita vijay chavhan	Msc 1 year
16 / 60	Akshay Bhaiyyalal Kasdekar	B.sc 2
22 / 60	Karishma Gendalal Kasdekar	B.Sc2nd year
47 / 60	Vaishnavi Sahebrao Kurhekar	Bsc Part2
19 / 60	Dipesh Ramcharan Patorkar	B.sc. 1st year
16 / 60	Shubham milke	2 year
15 / 60	Bhumika Charndas gondole	Bsc1
22 / 60	Ayman Kashaf	Bsc
16 / 60	Nitesh Onkar kasdekar	B.sc2
23 / 60	Mandakini R.Dabhade	B.A.2 year
14 / 60	Satish sukhahal dhikar	B ath second
15 / 60	Divakar Ramji jamunkar	BA 2y year
16 / 60	Shivcharan Bailram Belsare	BA II yir
36 / 60	Nameera Qariya Jameel	
	Ahmad	Bsc 1st year



15 / 60 Ajesh kadma kasdekar  
10 / 60 Shubham milke  
10 / 60 Kaustubh Panurkar  
8 / 60 Prajwal kale

Bsc2  
2year  
Bsc 2nd year  
Bsc



CO-ORDINATOR

**CAREER GUIDANCE CELL**

ESTD : 2003

Arts, Science and Commerce College  
Chikhaldara





Sipna Shikshan Prasarak Mandal, Amravati's  
**ARTS, SCIENCE & COMMERCE COLLEGE, CHIKHALDARA**  
**CAREER GUIDANCE CELL**  
(Career Guidance & Counseling Cell)  
(2023-2024)

Date: 21<sup>st</sup> Jan., 2024

Time: 02.00-03.00 pm

**'SCIENCE APTITUDE TEST'**

**CERTIFICATE OF EXCELLENCE**

This is to certify that Ky. Shwetal S. Shahare Class B.Sc.II  
has successfully participated in COLLEGE LEVEL 'SCIENCE APTITUDE TEST' organized by  
Career Guidance Cell, Arts, Science and Commerce College, Chikhaldara for all the students of the  
college and he/she stood second in the competition. Congratulations!

Dr. D.S. Hedaoo  
Coordinator  
Career Guidance Cell

Dr. R.S. Jaipurkar  
Principal  
Arts, Science and Commerce College,  
Chikhaldara

# Science Aptitude Test (2023-2024)

Sipna Shikshan Prasarak Mandal, Amravati  
Arts, Science and Commerce College, Chikhaldara

## Career Guidance Cell

(Career Guidance & Counseling Cell)

(2023-2024)

## SCIENCE APTITUDE TEST

Max. Marks: 60 Time: 01 Hour (2.00-3.00 PM) Date: 21.01.2024

\* Indicates required question

---

1. Email \*

---

2. Name of Student \*

---

3. Name of College/Institute \*

---

4. Class \*

---

5. Date of Birth \*

---

6. Mobile Number \*

---

7. Q01: Consider the following statements -

1. The crops which are sown in the rainy season are called kharif crops.
2. The crops grown in the winter season are called rabi crops.

Which of these statements is/are correct?

*Mark only one oval.*

- a) Only 1
- b) Only 2
- c) Neither 1 nor 2
- d) Both 1 and 2

8. Q02: Which of the followings not falls under the class of microorganisms?

*Mark only one oval.*

- a) Biomedical waste
- b) Bacteria
- c) Fungi
- d) Protozoa

9. Q03: Microorganisms are not used for the large scale production of\_\_\_\_\_.

*Mark only one oval.*

- a) Alcohol
- b) Wine
- c) Sulphuric acid
- d) Acetic acid (vinegar)

10. Q04: Consider the following statements:
1. Bakelite is a poor conductor of heat and electricity.
  2. It is used for making electrical switches, handles of various utensils, etc.
- Which of these statements is/are correct?

*Mark only one oval.*

- a) Only 1
- b) Only 2
- c) Neither 1 nor 2
- d) Both 1 and 2

11. Q05: Out of followings approximate time taken to degenerate is highest for\_\_\_\_\_.

*Mark only one oval.*

- a) Paper
- b) Wood
- c) Cotton cloths
- d) Fruits

12. Q06: Consider the following statements:
1. The examples of non-metals are iron, copper, aluminium, calcium, magnesium, etc.
  2. The examples of metals are sulphur, carbon, oxygen, phosphorus, etc
- Which of these statements is/are correct?

*Mark only one oval.*

- a) Only 1
- b) Only 2
- c) Neither 1 nor 2
- d) Both 1 and 2

13. Q07: In general, metallic oxides are \_\_\_\_\_ in nature.

*Mark only one oval.*

- a) Basic
- b) Acidic
- c) Amphoteric
- d) Neutral

14. Q08: Consider the following statements:

1. Sodium reacts vigorously with water.
2. Iron reacts with water slowly.

Which of these statements is/are correct?

*Mark only one oval.*

- a) Only 1
- b) Only 2
- c) Both 1 and 2
- d) Neither 1 nor 2

15. Q09: Consider the following statements:

1. Non-metals used in fertilisers to enhance the growth of plants.
2. Non-metal used in water purification process.

Which of these statements is/are correct?

*Mark only one oval.*

- a) Only 1
- b) Only 2
- c) Neither 1 nor 2
- d) Both 1 and 2

16. Q10: As coal contains mainly carbon, the slow process of conversion of dead vegetation into coal is called \_\_\_\_\_.

*Mark only one oval.*

- a) Carbonisation  
 b) Distillation  
 c) Decomposition  
 d) Transition

17. Q11. Which of the following following steps will save petrol while driving?
1. Drive at a constant and moderate speed as far as possible
  2. Ensure correct tyre pressure
  3. Switch off the engine at traffic lights or at a place where you have to wait

*Mark only one oval.*

- a) Only 1 and 2  
 b) Only 2 and 3  
 c) Only 3 and 1  
 d) All 1, 2 and 3

18. Q12. The lowest temperature at which a substance catches fire is called its \_\_\_\_\_.

*Mark only one oval.*

- a) Condensation temperature  
 b) Boiling Point  
 c) Melting Point  
 d) Ignition temperature.

19. Q13. Consider the following statements:

1. Spontaneous combustion of coal dust has resulted in many disastrous fires in coal mines.
2. Spontaneous forest fires are sometimes due to the heat of the sun or due to lightning strike.

Which of these statements is/are correct?

*Mark only one oval.*

- a) Only 1
- b) Only 2
- c) Both 1 and 2
- d) Neither 1 nor 2

20. Q14. Consider the following statements:

1. National Park is area where animals are protected from any disturbance to them and their habitat
2. Sanctuary is area reserved for wild life where they can freely use the habitats and natural resources.

Which of these statements is/are correct?

*Mark only one oval.*

- a) Only 1
- b) Only 2
- c) Both 1 and 2
- d) Neither 1 nor 2

21. Q15. Consider the following statements:

1. Cytoplasm is the jelly-like substance present between the cell membrane and the nucleus.

2. . Mitochondria, golgi bodies, ribosomes are present in the cytoplasm.

Which of these statements is/are correct?

*Mark only one oval.*

- a) Only 1
- b) Only 2
- c) Both 1 and 2
- d) Neither 1 nor 2

22. Q16. Consider the following statements:

1. The cells having nuclear material without nuclear membrane are termed eukaryotic cells .

2 The cells having well organised nucleus with a nuclear membrane are designated as prokaryotic cells .

Which of these statements is/are correct?

*Mark only one oval.*

- a) Only 1
- b) Only 2
- c) Both 1 and 2
- d) Neither 1 nor 2

23. Q17. Consider the following statements:

1. The testes produce the male gametes called sperms.

2. Millions of sperms are produced by the testes.

Which of these statements is/are correct?

*Mark only one oval.*

- a) Only 1
- b) Only 2
- c) Both 1 and 2
- d) Neither 1 nor 2

24. Q18. Consider the following statements:
1. Fertilization which takes place inside the female body is called internal fertilization.
  2. Internal fertilization occurs in many animals hens.
- Which of these statements is/are correct?

*Mark only one oval.*

- a) Only 1
- b) Only 2
- c) Both 1 and 2
- d) Neither 1 nor 2

25. Q19. Consider the following statements?
1. The animals which give birth to young ones are called viviparous animals.
  2. Those animals which lay eggs are called oviparous animals.
- Which of these statements is/are correct?

*Mark only one oval.*

- a) Only 1
- b) Only 2
- c) Both 1 and 2
- d) Neither 1 nor 2

26. Q20. Consider the following statements:
1. The first menstrual flow begins at puberty and is termed menarche.
  2. At 45 to 50 years of age, the menstrual cycle stops. Stoppage of menstruation is termed menopause .
- Which of these statements is/are correct?

*Mark only one oval.*

- a) Only 1
- b) Only 2
- c) Both 1 and 2
- d) Neither 1 nor 2

27. Q21. Consider the following statements:

1. Oxidation is the gain of oxygen or loss of hydrogen.
  2. Reduction is the loss of oxygen or gain of hydrogen.
- Which of these statements is/are correct?

*Mark only one oval.*

- a) Only 1
- b) Only 2
- c) Both 1 and 2
- d) Neither 1 nor 2

28. Q22. Consider the following statements:

1. Forces applied on an object in the same direction add to one another.
2. If the two forces act in the opposite directions on an object, the net force acting on it is the difference between the two forces.

Which of these statements is/are correct?

*Mark only one oval.*

- a) Only 1
- b) Only 2
- c) Both 1 and 2
- d) Neither 1 nor 2

29. Q23. Consider the following statements:

1. The force exerted by a magnet is an example of a contact force .
2. Objects or things fall towards the earth because it pulls them. This force is called the force of gravity.

Which of these statements is/are correct?

*Mark only one oval.*

- a) Only 1
- b) Only 2
- c) Both 1 and 2
- d) Neither 1 nor 2

30. Q24. Consider the following statements:
1. A neutral solution has a pH of exactly 0.
  2. An acidic solution has a pH less than 7.
  3. A basic solution a pH more than 7.

Which of these statements is/are correct?

*Mark only one oval.*

- a) Only 1 and 2
- b) Only 2 and 3
- c) Only 3 and 1
- d) All 1, 2 and 3.

31. Q25. The famous Dandi March in India's freedom struggle is associated with\_\_\_\_\_.

*Mark only one oval.*

- a) NaCl
- b) NaOH
- c) KCl
- d) Alcohol

32. Q26. Consider the following statements:

1. Force per unit area is called pressure.
2. Liquids and gases exert pressure on the walls of their containers.
3. The pressure exerted by air around us is known as atmospheric pressure.

Which of these statements is/are correct?

*Mark only one oval.*

- a) Only 1 and 2
- b) Only 2 and 3
- c) None of 1, 2 and 3.
- d) All 1, 2 and 3.

33. Q27. Consider the following statements:
1. Actually, sound needs a medium to travel.
  2. The sound cannot travel through vacuum.

Which of these statements is/are correct?

*Mark only one oval.*

- a) Only 1
- b) Only 2
- c) Both 1 and 2
- d) Neither 1 nor 2

34. Q28- Consider the following statements:
1. When one body rolls over the surface of another body, the resistance to its motion is called the rolling friction.
  2. Since the rolling friction is smaller than the sliding friction, sliding is replaced in most machines by rolling by the use of ball bearings.

Which of these statements is/are correct?

*Mark only one oval.*

- a) Only 1
- b) Only 2
- c) Both 1 and 2
- d) Neither 1 nor 2

35. Q29- Among Methyl alcohol, Ethyl alcohol, Propyl alcohol and Butyl alcohol which has the least number of carbon atoms in it's molecule?

*Mark only one oval.*

- a) Methyl alcohol
- b) Ethyl alcohol
- c) Propyl alcohol
- d) Butyl alcohol

36. Q30. Which class of the compounds has  $-\text{COOH}$  as functional group?

*Mark only one oval.*

- a) Ketone
- b) Aldehyde
- c) Alcohol
- d) Carboxylic acid

37. Q31. Consider the following statements:

1. The number of oscillations per second is called the frequency of oscillation.
2. Frequency is expressed in newton.

Which of these statements is/are correct?

*Mark only one oval.*

- a) Only 1
- b) Only 2
- c) Both 1 and 2
- d) Neither 1 nor 2

38. Q32. Consider the following statements:

1. The fact is that sounds of frequencies less than about 20 vibrations per second (20 Hz) cannot be detected by the human ear.
2. On the higher side, sounds of frequencies higher than about 20,000 vibrations per second (20 kHz) are also not audible to the human ear.

Which of these statements is/are correct?

*Mark only one oval.*

- a) Only 1
- b) Only 2
- c) Both 1 and 2
- d) Neither 1 nor 2

39. Q33. Consider the following pairs between name of element and its symbol.

1. Manganese- Mg
2. Potassium - P
3. Sodium- S
4. Oxygen- O

Which of these pairs is/are correctly matched?

*Mark only one oval.*

- a) Only 4
- b) Only 1 and 4
- c) Only 1, 2 and 3
- d) All 1, 2, 3 and 4

40. Q34. Consider the following pairs related to SI units :

1. Length- Meter
2. Mass- Kilogram
3. Time- Second
4. Temperature- Degree Celsius

Which of these pairs is/are correctly matched?

*Mark only one oval.*

- a) Only 1
- b) Only 1 and 4
- c) Only 1, 2 and 3
- d) None of 1, 2, 3 and 4

41. Q35. Consider the following statements:

1. The process of depositing a layer of any desired metal on another material by means of electricity is called electroplating.
2. Electroplating is one of the most common applications of chemical effects of electric current.
3. Jewellery makers electroplate silver and gold on less expensive metals.

Which of these statements is/are correct?

*Mark only one oval.*

- a) Only 1
- b) Only 1 and 2
- c) All of 1, 2 and 3
- d) None of 1, 2 and 3

42. Q36- Consider the following statements:

1. A computer is an electronic device for storing and processing data.
2. An abacus is a mechanical device that is used to calculate the arithmetic calculations quickly.
3. A computer is a machine that can be programmed to carry arithmetic or logical operations.

Which of these statements is/are correct?

*Mark only one oval.*

- a) Only 1
- b) Only 1 and 3
- c) All of 1, 2 and 3
- d) None of 1, 2 and 3

43. Q37. Consider the following statements:
1. Webcam is an input device.
  2. It is used to make video calls and take pictures.

Which of these statements is/are correct?

*Mark only one oval.*

- a) Only 1
- b) Only 2
- c) Both 1 and 2
- d) Neither 1 nor 2

44. Q38. Consider following statements:
1. A hard disk is used to store large amount of data.
  2. A pen drive is used to transfer data from one computer to another.
  3. A pen drive is also known as flash drive.

Which of these statements is/are correct?

*Mark only one oval.*

- a) Only 1
- b) Only 1 and 3
- c) All of 1, 2 and 3
- d) None of 1, 2 and 3

45. Q39. Consider the following statements related to computer world:
1. IPO cycle stands for Input-Process-Output cycle
  2. In computer, processing of data takes place in the CPU.
  3. Input can be taken in the form of data plus instructions.

Which of these statements is/are correct?

*Mark only one oval.*

- a) Only 1 and 2
- b) Only 2 and 3
- c) Only 1 and 3
- d) All 1, 2 and 3

46. Q40. Consider the following statements:

1. Primary memory is an inbuilt memory that can store data and instructions.
2. Primary memory is of three types- RAM, ROM and CPU.

Which of these statements is/are correct?

*Mark only one oval.*

- a) Only 1
- b) Only 2
- c) Both 1 and 2
- d) Neither 1 nor 2

47. Q41. Consider the following statements:

1. Lightning is an electric spark, but on a huge scale.
2. In ancient times people did not understand the cause of these sparks. They were, therefore, afraid of lightning and thought that the wrath of gods was visiting them.

Which of these statements is/are correct?

*Mark only one oval.*

- a) Only 1
- b) Only 2
- c) Both 1 and 2
- d) Neither 1 nor 2

48. Q42. Consider following statements related to thunderstorm?

1. Carrying umbrella is not a good idea at all during thunderstorms.
2. If in a forest, take shelter under shorter trees.
3. If no shelter is available and you are in an open field, stay far away from all trees.

Which of these statements is/are correct?

*Mark only one oval.*

- a) Only 1 and 2
- b) Only 1 and 3
- c) Only 2 and 3
- d) All 1, 2 and 3

49. Q43. Consider the following statements related to earthquakes:

1. Earthquakes occur all the time, all over the earth.
2. Major earthquakes are very very frequent.
3. The earthquakes can cause floods, landslides and tsunamis.

Which of these statements is/are correct?

*Mark only one oval.*

- a) Only 1 and 2
- b) Only 1 and 3
- c) All of 1, 2 and 3
- d) None of 1, 2 and 3

50. Q44. Consider the following statements:

1. The light ray, which strikes any surface, is called the incident ray.
2. The ray that comes back from the surface after reflection is known as the refracted ray.

Which of these statements is/are correct?

*Mark only one oval.*

- a) Only 1
- b) Only 2
- c) Both 1 and 2
- d) Neither 1 nor 2

51. Q45. Consider the following statements:

1. The incident ray, the normal at the point of incidence and the reflected ray all lie in the same plane.
2. The angle of incidence is always greater than the angle of reflection.

Which of these statements is/are correct?

*Mark only one oval.*

- a) Only 1
- b) Only 2
- c) Both 1 and 2
- d) Neither 1 nor 2

52. Q46. The rate of evaporation depends upon the surface area exposed to \_\_\_\_\_.

*Mark only one oval.*

- a) The atmosphere, the temperature, the humidity and the wind speed
- b) The temperature, the humidity and the wind speed
- c) The humidity and the wind speed
- d) The wind speed

53. Q47. Consider the following statements:

1. Latent heat of vaporisation is the heat energy required to change 1 kg of a liquid to gas at atmospheric pressure at its boiling point.
2. Latent heat of fusion is the amount of heat energy required to change 1 kg of solid into liquid at its melting point.

Which of these statements is/are correct?

*Mark only one oval.*

- a) Only 1
- b) Only 2
- c) Both 1 and 2
- d) Neither 1 nor 2

54. Q48. Consider the following statements:

1. Alloys are mixtures of two or more metals or a metal and a non-metal and cannot be separated into their components by physical methods.
2. Brass is a mixture of approximately 30% zinc and 70% copper.

Which of these statements is/are correct?

*Mark only one oval.*

- a) Only 1
- b) Only 2
- c) Both 1 and 2
- d) Neither 1 nor 2

55. Q49. Consider the following statements:

1. When no more solute can be dissolved in a solution at a given temperature, it is called a saturated solution.
2. The amount of the solute present in the saturated solution at this temperature is called its solubility.

Which of these statements is/are correct?

*Mark only one oval.*

- a) Only 1
- b) Only 2
- c) Both 1 and 2
- d) Neither 1 nor 2

56. Q50. Consider the following statements:

1. A colloid is a homogeneous mixture.
2. The size of particles of a colloid is too small to be individually seen by naked eyes.

Which of these statements is/are correct?

*Mark only one oval.*

- a) Only 1
- b) Only 2
- c) Both 1 and 2
- d) Neither 1 nor 2

57. Q51: Consider the following statements:

1. The subatomic particle which has no charge and a mass nearly equal to that of a proton eventually named as neutron.
2. Neutrons are present in the nucleus of hydrogen only.

Which of these statements is/are correct?

*Mark only one oval.*

- a) Only 1
- b) Only 2
- c) Neither 1 nor 2
- d) Both 1 and 2

58. Q52: Which element has the smallest atomic number?

*Mark only one oval.*

- a) Carbon
- b) Boron
- c) Uranium
- d) Hydrogen

59. Q53: Consider following statements:

1. An isotope of uranium is used as a fuel in nuclear reactors.
2. An isotope of cobalt is used in the treatment of cancer.
3. An isotope of iodine is used in the treatment of goitre.

Which of these statements is/are correct?

*Mark only one oval.*

- a) Only 1 and 2
- b) Only 2 and 3
- c) Only 1 and 3
- d) All 1, 2 and 3

60. Q54: Consider the following statements:

1. The structure of the plasma membrane can be observed only through an electron microscope.
2. The plasma membrane is flexible and is made up of organic molecules called lipids and proteins.

Which of these statements is/are correct?

*Mark only one oval.*

- a) Only 1
- b) Only 2
- c) Neither 1 nor 2
- d) Both 1 and 2

61. Q55: The flexibility of the cell membrane also enables the cell to engulf in food and other material from its external environment. Such processes are known as \_\_\_\_\_.

*Mark only one oval.*

- a) Endocytosis
- b) Plasmolysis
- c) Osmosis
- d) Hydrolysis

62. Q56: \_\_\_\_\_ are known as the powerhouses of the cell.

*Mark only one oval.*

- a) Cell wall
- b) Mitochondria
- c) Golgi apparatus
- d) Lysosomes

63. Q57: Bone is an example of \_\_\_\_\_.

*Mark only one oval.*

- a) Epithelial tissue
- b) Connective tissues
- c) Muscular tissue
- d) Nervous tissue

64. Q58: Out of followings which is not simple tissue?

*Mark only one oval.*

- a) Xylem
- b) Parenchyma
- c) Collenchyma
- d) Sclerenchyma

65. Q59: \_\_\_\_\_ are the organisms which do not have a defined nucleus or organelles, nor do any of them show multi-cellular body designs.

*Mark only one oval.*

- a) Protista
- b) Monera
- c) Plantae
- d) Animalia

66. Q60: Consider the following statements:

1. The tendency of undisturbed objects to stay at rest or to keep moving with the same velocity is called inertia. 2. The first law of motion is also known as the law of inertia.

Which of these statements is/are correct?

*Mark only one oval.*

- a) Only 1
- b) Only 2
- c) Neither 1 nor 2
- d) Both 1 and 2

---

This content is neither created nor endorsed by Google.

Google Forms

Sipna Shikshan Prasarak Mandal, Amravati  
Arts, Science and Commerce College, Chikhaldara  
**Career Guidance Cell**  
(Career Counseling and Guidance Cell)  
(2023-2024)

## General Knowledge Test

### REPORT

- Objectives:** To aware student about the type of possible questions in various Competitive Examinations  
To develop competitive spirit among students which ultimately leads to acquire general knowledge
- Date & Time:** 21.01.2024/1.00 to 2.00 pm
- Participants:** 94
- Question Paper:** 100 MCQ's based on History, Geography, The Constitution of India, Indian Economy, General Science, General Knowledge, Environment issues, Current Affairs etc.
- Mode:** Online through google form  
Google form link: <https://forms.gle/5SaZ2oZGdDEG7SvH9>
- Toppers:** First- Ku. Vaishnavi Kurhekar (B.Sc. II)  
Second- Suresh Devidas Zombade (B.Sc. II)  
Third- Yash Nilesh Gaurkhede (B.Sc. I)
- Awards:** Trophies for Toppers and Cash Prizes
- Documents:** Google form answer sheet  
Google form link



Dr. D.S. HEDAOO  
CO-ORDINATOR

**CAREER GUIDANCE CELL**

ESTD : 2003

Arts, Science and Commerce College  
Chikhaldara



Dr. R.S. JAIPURKAR  
PRINCIPAL

Arts, Science & Commerce College  
Chikhaldara

## Notice - 05

Page No.

Date 15 01 2024

All the teachers and students, hereby informed that following activities are arranged as per given schedule.

Sr.No.	Activity	Date	Time
01	G.K. Test	21.01.2024	01.00 - 2.00 pm
02	Science Aptitude Test	21.01.2024	02.00 - 3.00 pm
03	Essay Test.	<del>22.01.2024</del> 09.02.2024	<del>12.15 - 1.15 pm</del> 04.00 - 5.00 pm.


Please Note:

- G.K. Test <sup>Science Aptitude Test</sup> will be conducted online through Google form.
- Essay Test will be conducted offline.

All the students are expected to appear for these activities and all the teachers are requested to co-operate for the related work.

- Teachers have to send Google form Link of G.K. Test & Science Aptitude Test to their 'Palya students'.

The links of these tests will be uploaded on "ASC Chikhaldara" WhatsApp group and you have to send these to your 'Palya students'.

  
CO-ORDINATOR

**CAREER GUIDANCE CELL**

ESTD : 2003

Arts, Science and Commerce College  
Chikhaldara

M/L

**PRINCIPAL**  
Arts, Science & Commerce  
College, Chikhaldara

Sipna Shikshan Prasarak Mandal, Amravati  
Arts, Science and Commerce College, Chikhaldara

## Career Guidance Cell

(Career Guidance and Counseling Cell)  
(2023-2024)

### GENERAL KNOWLEDGE TEST

#### MARKSHEET

Score	Name of Students	Class
23 / 100	Brijesh rajesh rathod	B.sc 1year
27 / 100	Aniket Parmodrao sadanshiv	B com 13th
24 / 100	Bhumika Gopal sable	1st year
25 / 100	Pravin bhau kasdekar	B, com 1 year
23 / 100	Dipali Raysing chatur	B A 2
24 / 100	Satyadev Ganesh Patorkar	B.A 1
33 / 100	Sachin Vilas metange	Bsc 1
29 / 100	Ayman Kashaf	Bsc
26 / 100	Aditya arvind Zod	Bsc1
22 / 100	Anil manaji sawlkar	B, A,II
78 / 100	Mohd khizar mohd mukhtar	Bsc 1st year
20 / 100	Roshan Champalal Belsare	B. A 1
27 / 100	Shital gorelal kale	BA 2
26 / 100	Gaurav Jitendra Agrawal	Bsc 1
81 / 100	Yash Nilesh Gaurkhede	B.Sc.
26 / 100	Shital kajjulal Kasdekar	B.sc2
20 / 100	Mujahid Ahmad khan	B.s.c.1sem
19 / 100	Rajkumar Puna Kasdekar	B A iii
50 / 100	Rushikesh Ramcharan Dammale	B.sc 1st year
25 / 100	Shital gorelal kale	BA
	Mohammad Taufiq Mohammad	
25 / 100	Rafiq	1 year
48 / 100	Abhishek Ashokrao Mohod	Bsc 2nd Year




24 / 100	Anita Rajma Baraskar	MSc second year
25 / 100	Nirmala kishor Bhilavekar	B A 2
57 / 100	Sakshi raju jog	BA 2
38 / 100	Pawan shamlal mawaskar	Bsc. 2 year
20 / 100	Dipali sonaji kale	Bsc2
65 / 100	Darshana Dhale	BSC 3rd year
30 / 100	Rohit potekar	Bsc.1
19 / 100	Shital gorelal kale	BA2
22 / 100	Neha mavaskar	B.A
55 / 100	Manisha Navalsing Sawalkar	B.sc. 1
26 / 100	Komal Sakharam dhande	B.sc 2
29 / 100	Mamta Ramji Kasdekar	B. A. Part 2
27 / 100	Dhanashri vitthalrao gomase	B. Com 1 years
33 / 100	Aparna manu Darsimbe	B.A faster
25 / 100	Akash Ramesh Dhikar	B. A 1
48 / 100	Sandip Sonaji Dhikar	B.A 1
28 / 100	Taqaddas Ammara Syed Ahmed Ali	Bsc 2 year
19 / 100	Kavita Munna bhilavekar	B.A
23 / 100	Ajay Manaji Chatur	B.sc II
40 / 100	Khushi tayde	Bsc 1 year
35 / 100	Mohan Ganesh Yewale	B.A 1 year
42 / 100	Rahul Rajaram Bethekar	B.sc 3 rd year
36 / 100	Akshay Bhaiyyalal Kasdekar	B.sc 2
29 / 100	Samiksha Isram kale	B com 3
23 / 100	Roshan Champalal Belsare	B. A 1
31 / 100	Sushila Ganesh belsare	B.sc second year
41 / 100	Rahul ramesh kasdekar	Bsc2
34 / 100	Ajesh kadma kasdekar	Bs.c 2th
25 / 100	Mandakini R.Dabhade	B.A.2 year



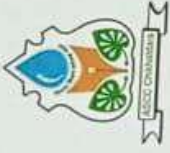
28 / 100	Divakar Ramji jamunkar	BA 2 year
33 / 100	Alma taif	BSC. 1st year
25 / 100	Shivcharan Bailram Belsare	B A II yir
21 / 100	Shital gorelal kale	BA2
46 / 100	Nitesh Onkar kasdekar	B.sc-2
29 / 100	Abhishek Maun Darsimbe	Bsc III year
37 / 100	Vaibhav rajju darsimbe	B.a 2 year
34 / 100	Nilima ratanlal jamie	Ba first year
87 / 100	Vaishnavi Sahebrao Kurhekar	Bsc Part 2
24 / 100	Shreyash Sonar	Bsc -2(Semester -4)
50 / 100	Gauri Dinkar Bhongade	Bsc 2nd year
69 / 100	Khushi shailesh malviya	B.sc II
17 / 100	Sonali sukhdev jawarkar	Bsc 1
40 / 100	Mohammad nadeem	Bsc first year
17 / 100	Pawan Dayaram kale	BA. II
46 / 100	Sandhya shyamkishor bilve	Bsc second year
42 / 100	SONALI Doma Kasdekar	M.ScII Year
45 / 100	Saroj dhurve	1st year
28 / 100	Karishma drararam Bhilavekar	B.A1
68 / 100	Divya Dipak Sangele	Bsc 3rd year
35 / 100	Manisha mahadev selukar	M sc II year
78 / 100	Shwetal Sudesh Shahare	B.sc.2
29 / 100	Roshan Champalal Belsare	B. A 1
28 / 100	Rupali motilal bethekar	Bcom 1st year
32 / 100	shivcharnbelsare	B A II yir
32 / 100	Anita shalikram Zamarkar	Bcom 3
24 / 100	abhishek athole	<u>b.com</u>
21 / 100	Gomaji Rona Kasdekar	A.B.1
63 / 100	Arpita vijay chavhan	MSC first year
42 / 100	Gaurav Ramu Zarekar	Bs.c3



86 / 100	Suresh Devidas Zombade	BSC 2nd year
28 / 100	Dipesh Ramcharan Patorkar	B.sc. 1st year
48 / 100	Karishma Gendalal Kasdekar	B.Sc 2nd year
30 / 100	Sanket Mahajan	B.sc 2 years semester 4
43 / 100	Shaikh Danish Shaikh Amad	Bsc 3rd year
17 / 100	Dipika Nandkishor Bochare	Bsc-3rd year
30 / 100	Om shudhirrao kale	BSC 1st year
	KAILASH PANNALAL JAMBEKAR	B.COM.III
55 / 100	Kaustubh Panurkar	Bsc 2nd year
23 / 100	Dhananjay Mohod	Bsc
64 / 100	Narayan Chhote Mawaskar	B.sc 3rd year
69 / 100	Ved Bajpeyee	Bsc 1st year (sem 2)
71 / 100	Pranav Shankarrao Rao	B. Sc part II. Semester III

  
**CO-ORDINATOR**  
**CAREER GUIDANCE CELL**  
 ESTD : 2003  
 Arts, Science and Commerce College  
 Chikhaldara





Sipna Shikshan Prasarak Mandal, Amravati's  
**ARTS, SCIENCE & COMMERCE COLLEGE, CHIKHALDARA**  
**CAREER GUIDANCE CELL**  
(Career Guidance & Counseling Cell)  
(2023-2024)

Date: 21<sup>st</sup> Jan., 2024

Time: 01.00-02.00 pm

**'GENERAL KNOWLEDGE TEST'**

**CERTIFICATE OF EXCELLENCE**

This is to certify that Ku. Vaishnavi S. Kurhekar Class B.Sc.II

*has successfully participated in COLLEGE LEVEL 'GENERAL KNOWLEDGE TEST' organized by  
Career Guidance Cell, Arts, Science and Commerce College, Chikhaldara for all the students of the  
college and he/she stood first in the competition. Congratulations!*

Dr. D.S. Hedao  
Coordinator  
Career Guidance Cell

Dr. R.S. Jaipurkar  
Principal  
Arts, Science and Commerce College,  
Chikhaldara

# General Knowledge Test (2023-2024)

Sipna Shikshan Prasarak Mandal, Amravati  
Arts, Science and Commerce College, Chikhaldara  
Career Guidance Cell  
(Career Guidance & Counseling Cell)  
(2023-2024)

GENERAL KNOWLEDE TEST

Max. Marks: 100 Time: 01 Hour (1.00 to 2.00 pm) Date: 21.01.2024

\* Indicates required question

---

1. Email \*

---

2. Name of Student \*

---

3. Name of College/Institute \*

---

4. Class \*

---

5. Date of Birth \*

---

6. Mobile Number \*

---

7. Q1. Which of the following statements is/are correct?
1. After the death of Aurangzeb, the Bengal nawabs asserted their power and autonomy, as other regional powers were doing at that time.
  2. In 1765 the Mughal emperor appointed the Company as the Diwan of the provinces of Bengal.

*Mark only one oval.*

- a) Only 1
- b) Only 2
- c) Both 1 and 2
- d) Neither 1 nor 2

8. Q2. Consider the following statements:
1. Lord Dalhousie who was the Governor-General from 1848 to 1856 devised a policy that came to be known as the Doctrine of Lapse.
  2. The doctrine declared that if an Indian ruler died without a female heir his kingdom would "lapse", that is, become part of Company territory.
- Which of these statements is/are correct?

*Mark only one oval.*

- a) Only 1
- b) Only 2
- c) Both 1 and 2
- d) Neither 1 nor 2

9. Q3: Consider the following pairs. Which of these are correctly matched?
1. Lord Ram- Ayodhya
  2. Lord Krishna- Mathura
  3. Lord Shiva-Kashi

*Mark only one oval.*

- a) Only 1 and 2
- b) Only 2 and 3
- c) Only 1 and 3
- d) All 1,2 and 3

10. Q4: Consider the following statements:

1. Vardhamana Mahavira, who founded Jainism, and Gautama Buddha, who founded Buddhism belonged to the kshatriya clan.
2. The kshatriya reaction against the domination of the priestly class called brahmanas, who claimed various privileges, was one of the causes of the origin of new religions.

Which of these statements is/are correct?

*Mark only one oval.*

- a) Only 1
- b) Only 2
- c) Both 1 and 2
- d) Neither 1 nor 2

11. Q5: Consider the following statements:

1. Jainism recognized the the existence of gods but placed them lower than the jina .
2. Jainism did not condemn the varna system.

Which of these statements is/are correct?

*Mark only one oval.*

- a) Only 1
- b) Only 2
- c) Both 1 and 2
- d) Neither 1 nor 2

12. Q6: Which of the following statements is/are correct?

1. Nearly 1500 Harappan sites are known so far in subcontinent.
2. In Mohenjo-daro the largest building is a granary.

*Mark only one oval.*

- a) Both 1 and 2
- b) Neither 1 nor 2
- c) Only 1
- d) Only 2

13. Q7: After the conquest of Iran, Alexander moved on to Kabul, from where he marched to India through \_\_\_\_\_ in 326 B.C.

*Mark only one oval.*

- a) Zoji La
- b) Karakoram pass
- c) Debsa pass
- d) Khyber pass

14. Q8: The Maurya dynasty was founded by \_\_\_\_\_.

*Mark only one oval.*

- a) Chanakya
- b) Chandragupta Maurya
- c) Nandas
- d) Ashoka

15. Q9: The \_\_\_\_\_ pillar at Mehrauli, Delhi, is a remarkable example of the skill of Indian crafts persons.

*Mark only one oval.*

- a) Gold
- b) Silver
- c) Copper
- d) Iron

16. Q10: Which of the following statements related to south India is/are correct?

1. The kingdom of the Pallavas spread from the region around their capital, Kanchipuram, to the Kaveri delta.
2. The kingdom of the Chalukyas was centred around the Raichur Doab, between the rivers Krishna and Tungabhadra.

*Mark only one oval.*

- a) Both 1 and 2
- b) Neither 1 nor 2
- c) Only 1
- d) Only 2

17. Q11: Consider the following statements related to the inscriptions of the Pallavas :

1. The sabha was an assembly of brahmin land owners.
2. The ur was a village assembly found in areas where the land owners were not brahmins.

Which of these statements is/are correct?

*Mark only one oval.*

- a) Only 1
- b) Only 2
- c) Both 1 and 2
- d) Neither 1 nor 2

18. Q12. Consider the following statements:

1. South India was famous for gold, spices, especially pepper, and precious stones.
2. Pepper was particularly valued in the Roman Empire, so much so that it was known as white gold.

Which of these statements is/are correct?

*Mark only one oval.*

- a) Only 1
- b) Only 2
- c) Both 1 and 2
- d) Neither 1 nor 2

19. Q13. Consider the following statements:

1. In the northern part of the country, the village headman was known as the grama bhojaka.
2. The grama bhojaka was often the largest landowner.

Which of these statements is/are correct?

*Mark only one oval.*

- a) Neither 1 nor 2
- b) Both 1 and 2
- c) Only 1
- d) Only 2

20. Q14. Consider the following statements:

1. Ashoka's dhamma did not involve worship of a god, or performance of a sacrifice.

2. Ashoka appointed officials, known as the dhamma pujari who went from place to place teaching people about dhamma.

Which of these statements is/are correct?

*Mark only one oval.*

- a) Only 1
- b) Only 2
- c) Both 1 and 2
- d) Neither 1 nor 2

21. Q15- Consider the following statements:

1. The Buddha taught in the language of the ordinary people, Prakrit, so that everybody could understand his message.

2. Upanishad literally means 'approaching and sitting near' and the texts contain conversations between teachers and students. Often, ideas were presented through simple dialogues.

Which of these statements is/are correct?

*Mark only one oval.*

- a) Neither 1 nor 2
- b) Both 1 and 2
- c) Only 1
- d) Only 2

22. Q16 Consider the following statements:

1. Both Jaina and Buddhist monks went from place to place throughout the year, teaching people.
2. The only time they stayed in one place was during the summer season, when it was very difficult to travel.

Which of these statements is/are correct?

*Mark only one oval.*

- a) Neither 1 nor 2
- b) Both 1 and 2
- c) Only 1
- d) Only 2

23. Q17. Consider the following statements:

1. Rashtrakutas in the Deccan initially were subordinate to the Chalukyas of Karnataka.
2. In the mid-eighth century, Dantidurga, a Rashtrakuta chief, overthrew his Chalukya overlord and performed a ritual called hiranya-garbha.

Which of these statements is/are correct?

*Mark only one oval.*

- a) Neither 1 nor 2
- b) Both 1 and 2
- c) Only 1
- d) Only 2

24. Q18. Which of the following pairs is/are correctly matched?

- 1) Raziyya -Early Turkish Ruler
- 2) Ghiyasuddin Balban - Founder of Lodi dynasty

*Mark only one oval.*

- a) Only 1
- b) Only 2
- c) Both 1 and 2
- d) Neither 1 nor 2

25. Q19: Today the Prime Minister of India addresses the nation from the ramparts of the Red Fort in Delhi, the residence of the \_\_\_\_\_ emperors, on Independence Day.

*Mark only one oval.*

- a) Rajput
- b) Maratha
- c) Lodi
- d) Mughal

26. Q20. During Quit India Movement who gave the mantra 'Do or Die' to the people?

*Mark only one oval.*

- a) Bhagat Singh
- b) Chandra Shekhar Azad
- c) Sukhdev
- d) Mahatma Gandhi

27. Q21: If you plan to visit Mathura during your 2024 summer vacations, which one of the following State of India you will be going to?

*Mark only one oval.*

- a) Himachal Pradesh
- b) Madhya Pradesh
- c) Andhra Pradesh
- d) Uttar Pradesh

28. Q22: Which of the following Indian state not have boundary with both Pakistan?

*Mark only one oval.*

- a) Punjab
- b) Haryana
- c) Rajasthan
- d) Gujarat

29. Q23. Consider the following statements:

1. Sea route between India to Myanmar is through Arabian sea.
2. Arabian sea is on the west side of India.

Which of these statements is/are correct?

*Mark only one oval.*

- a) Only 1
- b) Only 2
- c) Both 1 and 2
- d) Neither 1 nor 2

30. Q24: If you plan to visit Kaziranga National Park during your 2024 winter vacations, which one of the following State of India you will be going to?

*Mark only one oval.*

- a) Assam
- b) Arunachal Pradesh
- c) West Bengal
- d) Bihar

31. Q25. Consider the following statements:

1. The country Ukraine has the water boundary with Black Sea
2. The country Ukraine has the land boundary with Poland

Which of these statements is/are correct?

*Mark only one oval.*

- a) Only 1
- b) Only 2
- c) Both 1 and 2
- d) Neither 1 nor 2

32. Q26: Consider the following statements:

1. The sun, the moon and all those objects shining in the night sky are called celestial bodies.
2. The sun is a star .

Which of these statements is/are correct?

*Mark only one oval.*

- a) Only 1
- b) Only 2
- c) Both 1 and 2
- d) Neither 1 nor 2

33. Q27: Pole Star indicates \_\_\_\_\_ direction.

*Mark only one oval.*

- a) East
- b) West
- c) South
- d) North

34. Q28: Consider the following statements:

1. Tropic of Capricorn ( $23\frac{1}{2}^{\circ}$  N) is in the Northern Hemisphere.
2. Tropic of Cancer ( $23\frac{1}{2}^{\circ}$  S) is in the Southern Hemisphere.

Which of these statements is/are correct?

*Mark only one oval.*

- a) Only 1
- b) Only 2
- c) Both 1 and 2
- d) Neither 1 nor 2

35. Q29: \_\_\_\_\_ is considered as 'Earth's-twin' because its size and shape are very much similar to that of the earth

*Mark only one oval.*

- a) Mars
- b) Venus
- c) Pluto
- d) Saturn

36. Q30: \_\_\_\_\_ sea port is in Gujarat.

*Mark only one oval.*

- a) Kandla
- b) Marmagao
- c) Paradwip
- d) Jawaharlal Nehru

37. Q31: Consider the following statements:

1. Every fourth year, February is of 29 days instead of 28 days.
2. A year with 365 days is called a leap year.

Which of these statements is/are correct?

*Mark only one oval.*

- a) Only 1
- b) Only 2
- c) Both 1 and 2
- d) Neither 1 nor 2

38. Q32: On 21st March and September 23rd, direct rays of the sun fall on the \_\_\_\_\_.

*Mark only one oval.*

- a) Equator
- b) Tropic of Capricorn
- c) Tropic of Cancer
- d) None of these

39. Q33: In the physical map of the country mountains and water bodies are shown by \_\_\_\_\_ colours respectively.

*Mark only one oval.*

- a) Blue and Brown  
 b) Brown and Blue  
 c) Brown and Yellow  
 d) Yellow and Brown

40. Q34: The solid portion of the earth on which we live is called the \_\_\_\_\_.

*Mark only one oval.*

- a) Atmosphere  
 b) Hydrosphere  
 c) Biosphere  
 d) Lithosphere

41. Q35: The Sahara Desert, the world's largest hot desert, is located in \_\_\_\_\_.

*Mark only one oval.*

- a) Asia  
 b) Africa  
 c) Europe  
 d) North America

42. Q36: Research stations named as Maitri and Dakshin Gangotri at the Antarctica belong to\_\_\_\_\_.

*Mark only one oval.*

- a) Nepal
- b) Myanmar
- c) Bangladesh
- d) India

43. Q37: Which of the following is not the type of mountain?

*Mark only one oval.*

- a) God mountain
- b) Volcanic mountain
- c) Fold mountain
- d) Block mountain

44. Q38: Consider the following statements:

1. Rajasthan is the largest state in terms of area.
2. Goa is the smallest state in terms of area.

Which of these statements is/are correct?

*Mark only one oval.*

- a) Only 1
- b) Only 2
- c) Both 1 and 2
- d) Neither 1 nor 2

45. Q39: Consider the following statements related to islands of India:
1. Lakshadweep Islands are located in the Arabian Sea. These are coral islands located off the coast of Kerala.
  2. The Andaman and the Nicobar Islands lie to the southeast of the Indian mainland in the Bay of Bengal.

Which of these statements is/are correct?

*Mark only one oval.*

- a) Only 1
- b) Only 2
- c) Both 1 and 2
- d) Neither 1 nor 2

46. Q40: Consider the following statements related to the climate of India:
1. Mawsynram in Meghalaya receives the world's highest rainfall .
  2. Jaisalmer and Bikaner in the desert of Maharashtra are very hot.

Which of these statements is/are correct?

*Mark only one oval.*

- a) Only 1
- b) Only 2
- c) Both 1 and 2
- d) Neither 1 nor 2

47. Q41: Consider the following statements related to production of the goods and services-

1. Tools, machines, buildings can be used in production over many years, and are called fixed capital.
2. Raw materials and money in hand are called working capital.

Which of these statements is/are correct?

*Mark only one oval.*

- a) Only 1
- b) Only 2
- c) Both 1 and 2
- d) Neither 1 nor 2

48. Q42: Consider the following statements related to Indian agriculture-

1. Chemical fertilizers provide minerals which dissolve in water and are immediately available to plants.
2. Chemical fertilizers can also kill bacteria and other microorganisms in the soil. This means some time after their use, the soil will be less fertile than ever before.

Which of these statements is/are correct?

*Mark only one oval.*

- a) Only 1
- b) Only 2
- c) Both 1 and 2
- d) Neither 1 nor 2

49. Q43: Consider the following statements-

1. Unlike farming, non-farm activities require little land. People with some amount of capital can set up non-farm activities.
2. Another thing which is essential for expansion of non-farm activities is to have markets where the goods and services produced can be sold.

Which of these statements is/are correct?

*Mark only one oval.*

- a) Only 1
- b) Only 2
- c) Both 1 and 2
- d) Neither 1 nor 2

50. Q44: Consider the following statements related to India-

1. Indian Space Research Organization ( ISRO) not provides its service to other nations.
2. Iron deposits in India will boost electric vehicles use in India.

Which of these statements is/are correct?

*Mark only one oval.*

- a) Only 1
- b) Only 2
- c) Both 1 and 2
- d) Neither 1 nor 2

51. Q45: Which of the following country is not a developed country?

*Mark only one oval.*

- a) United Kingdom
- b) France
- c) USA
- d) Brazil

52. Q46: Consider the following statements related to India-
1. India's Green Revolution is a dramatic example of how the input of greater knowledge in the form of improved production technologies can rapidly increase the productivity of scarce land resources.
  2. India's IT revolution is a striking instance of how the importance of human capital has come to acquire a higher position than that of material, plant and machinery.

Which of these statements is/are correct?

*Mark only one oval.*

- a) Only 1
- b) Only 2
- c) Both 1 and 2
- d) Neither 1 nor 2

53. Q47: Consider the following statements related to India-
1. For many decades in India, a large population has been considered a liability rather than an asset.
  2. But a large population need not be a liability. It can be turned into a productive asset by investment in human capital.

Which of these statements is/are correct?

*Mark only one oval.*

- a) Only 1
- b) Only 2
- c) Both 1 and 2
- d) Neither 1 nor 2

54. Q48: Consider the following frequently used abbreviations in world affairs:

1. World Transport Organisation -WTO
2. Women Health Organisation -WHO

Which of these abbreviations is/are correct?

*Mark only one oval.*

- a) Only 1
- b) Only 2
- c) Both 1 and 2
- d) Neither 1 nor 2

55. Q49: Consider the following statements related to economy-

1. Israel- Hamas conflict leading to a worldwide surge in inflation.
2. War does not affect economy of country.

Which of these statements is/are correct?

*Mark only one oval.*

- a) Only 1
- b) Only 2
- c) Both 1 and 2
- d) Neither 1 nor 2

56. Q50: Consider the following statements related to employment scenario in India-

1. In case of urban areas, there is seasonal and disguised unemployment.
2. Rural areas have mostly educated unemployment.

Which of these statements is/are correct?

*Mark only one oval.*

- a) Only 1
- b) Only 2
- c) Both 1 and 2
- d) Neither 1 nor 2

57. Q51: Consider the following statements related to poverty in India-
1. A person is considered poor if his or her income or consumption level falls below a given minimum level necessary to fulfill basic needs.
  2. What is necessary to satisfy basic needs is different at different times and in different countries.

Which of these statements is/are correct?

*Mark only one oval.*

- a) Only 1
- b) Only 2
- c) Both 1 and 2
- d) Neither 1 nor 2

58. Q52: Food and Agriculture Organization and United Nations has recognized \_\_\_\_\_ as International Year of Millets or IYM2023 for awareness about health and nutritional benefits of millets.

*Mark only one oval.*

- a) 2022
- b) 2023
- c) 2024
- d) 2020

59. Q53: Which of the following factor is not related to the food security of a person?

*Mark only one oval.*

- a) Availability of food
- b) Accessibility of food
- c) Affordability of food
- d) Religion permission

60. Q54: The \_\_\_\_\_ covers activities in which natural products are changed into other forms through ways of manufacturing that we associate with industrial activity.

*Mark only one oval.*

- a) Primary sector
- b) Secondary sector
- c) Tertiary sector
- d) Quaternary sector

61. Q55: In India, the Reserve Bank of India issues currency notes on behalf of the \_\_\_\_\_.

*Mark only one oval.*

- a) Central government.
- b) State government.
- c) District Bank
- d) State Bank of India

62. Q56: Which of the following is not democratic countries at present?

*Mark only one oval.*

- a) India
- b) Nepal
- c) Afghanistan
- d) Bangladesh

63. Q57: In the first cabinet of free India (1947), who was the home minister of India?

*Mark only one oval.*

- a) Jawaharlal Nehru
- b) Sardar Vallabhbhai Patel
- c) Dr. Rajendra Prasad
- d) Dr. B. R. Ambedkar

64. Q58: Consider the following pairs related to the India. Which of these pairs are correctly matched?

1. Article 1 - Related to Name and territory of the union
2. Article 52- The President of India
3. Article 79- Constitution of Parliament

*Mark only one oval.*

- a) Only 1 and 2
- b) Only 2 and 3
- c) Only 1 and 3
- d) All 1,2 and 3

65. Q59: Out of followings which statements regarding Dr. B.R. Ambedkar, which is/are correct?

1. Dr Babasaheb Ambedkar is known as the Father of the Indian Constitution.
2. Dr Ambedkar believed that his participation in the Constituent Assembly helped the Scheduled Castes get some safeguards in the draft constitution.
3. Dr. Ambedkar urged Scheduled Castes to join the government as well as the civil services.

*Mark only one oval.*

- a) Only 1 and 2
- b) Only 2 and 3
- c) Only 1 and 3
- d) All 1,2 and 3

66. Q60: Consider following statements. Which of them are correct?
1. India, as we know, became independent on 15 August 1947.
  2. Preceding this was a long and difficult struggle in which many sections of society participated.
  3. People from various backgrounds joined the struggle and they were inspired by the ideas of freedom, equality and participation in decision making.

*Mark only one oval.*

- a) Only 1 and 2
- b) Only 2 and 3
- c) Only 1 and 3
- d) All 1,2 and 3

67. Q61: Dr. Subrahmanyam Jaishankar is holding \_\_\_\_\_ in the government of India ?

*Mark only one oval.*

- a) Ministry of Road Transport and Highways
- b) Ministry of Defence
- c) Ministry of External Affairs
- d) Ministry of Home Affairs

68. Q62: Consider the following statements related to the the Parliament in India :
1. The Parliament in our system has immense powers because it is the representative of the people.
  2. The Lok Sabha is usually elected once every five years.
- Which of these statements is/are correct?

*Mark only one oval.*

- a) Only 1
- b) Only 2
- c) Both 1 and 2
- d) Neither 1 nor 2

69. Q63: The members of the Rajya Sabha are elected by the elected members of the Legislative Assemblies of various states. There are 233 elected members plus \_\_\_\_\_ members nominated by the President.

*Mark only one oval.*

- a) 12
- b) 22
- c) 10
- d) 02

70. Q64: The Supreme Court in India was established on \_\_\_\_\_, the day India became a Republic

*Mark only one oval.*

- a) 26 November 1949
- b) 26 January 1950
- c) 15 August 1947
- d) 15 August 1950

71. Q65: The term \_\_\_\_\_ refers to the court declaring that a person is not guilty of the crime which he/she was tried for by the court.

*Mark only one oval.*

- a) Eviction
- b) Compensation
- c) Appeal
- d) Acquit

72. Q66: Who was the chairman of Steering Committee in the constituent assembly of constitution making of free India?

*Mark only one oval.*

- a) Jawaharlal Nehru
- b) Sardar Patel
- c) Dr. Rajendra Prasad
- d) Dr. B. R. Ambedkar

73. Q67: Articles 14-18 in the Indian Constitution are associated with\_\_\_\_\_.

*Mark only one oval.*

- a) Right to Equality
- b) Right to Constitutional Remedies
- c) Right against Exploitation
- d) Right to Freedom of Religion

74. Q68: National Emergency on the ground of war can be declared in India using Article\_\_\_\_\_.

*Mark only one oval.*

- a) 352
- b) 356
- c) 365
- d) 376

75. Q69: The characteristic of \_\_\_\_\_ is not mentioned in the Preamble to the Indian Constitution.

*Mark only one oval.*

- a) Socialist
- b) Secular
- c) Democratic
- d) Hindu State

76. Q70: Which of the following is not state but union territory in India?

*Mark only one oval.*

- a) Bihar
- b) Manipur
- c) Lakshadweep
- d) West Bengal

77. Q71: Consider following statements related to Indian constitution. Which of them are correct?

1. To pay taxes is a fundamental duty of the citizens.
2. To abide by the constitution is a fundamental duty of the citizens.
3. To value and preserve the rich heritage of the country's composite culture is a fundamental duty of the citizens.

*Mark only one oval.*

- a) Only 1 and 2
- b) Only 2 and 3
- c) Only 1 and 3
- d) None of these

78. Q72: Consider the following statements related to the president of India.

1. The President of India has executive powers.
2. The President of India has legislative powers.

Which of these statements is/are correct?

*Mark only one oval.*

- a) Only 1
- b) Only 2
- c) Both 1 and 2
- d) Neither 1 nor 2

79. Q73: Consider the following statements related to the oath administered to the Prime Minister of India by the President of India.

1. To bear true faith and allegiance to the Constitution of India.
2. To uphold the sovereignty and integrity of India.

Which of these statements is/are correct?

*Mark only one oval.*

- a) Only 1
- b) Only 2
- c) Both 1 and 2
- d) Neither 1 nor 2

80. Q74: Defence Industries is subject of \_\_\_\_\_ in the Indian Constitution.

*Mark only one oval.*

- a) Union List
- b) State List
- c) Concurrent List
- d) District List

81. Q75: In the first general election for Lok Sabha \_\_\_\_\_ party won highest number of seats.

*Mark only one oval.*

- a) Communist
- b) Socialist
- c) Jana Sangh
- d) Congress

82. Q76: Consider following pairs of classical dance and states associated. Which of them are correctly matched?

1. Bharatanatyam- Tamil Nadu
2. Odissi Dance- Orissa
3. Manipuri Dance- Manipur

*Mark only one oval.*

- a) Only 1 and 2
- b) Only 2 and 3
- c) Only 1 and 3
- d) All 1,2 and 3

83. Q77: In 2024 military strength rankings India is at \_\_\_\_ position.

*Mark only one oval.*

- a) Fourth
- b) Third
- c) Second
- d) First

84. Q78: Pinaka, Multi-Barrel Rocket Launch System is developed by\_\_\_\_\_.

*Mark only one oval.*

- a) DRDO
- b) ICMR
- c) NASA
- d) ISRO

85. Q79: The Ministry of \_\_\_\_\_ has released new guidelines for coaching centers to counter misleading advertisement in the country.

*Mark only one oval.*

- a) Home Affairs
- b) Education
- c) External Affairs
- d) Finance

86. Q80: The book 'Exam Warriors' is written by\_\_\_\_\_.

*Mark only one oval.*

- a) Amit Shah
- b) Narendra Modi
- c) S. Jaishankar
- d) Rahul Gandhi

87. Q81: ONGC recently discovered natural gas blocks in the basin of the river

\_\_\_\_\_.

*Mark only one oval.*

- a) Yamuna
- b) Ganga
- c) Tapi
- d) Mahanadi

88. Q82: Surat Diamond Bourse, the world's largest corporate office is in

\_\_\_\_\_.

*Mark only one oval.*

- a) Maharashtra
- b) Meghalaya
- c) Gujarat
- d) Goa

89. Q83: National Archives of India works under the Ministry of \_\_\_\_\_.

*Mark only one oval.*

- a) Ministry of Culture
- b) Ministry of Tourism
- c) Ministry of Power
- d) Ministry of Education

90. Q84: Recently research suggests \_\_\_\_\_ use might cause lower sperm count in male.

*Mark only one oval.*

- a) Aircraft  
 b) Rocket  
 c) Mobile  
 d) Air-conditioner

91. Q85: International Museum Day is celebrated on \_\_\_\_\_.

*Mark only one oval.*

- a) 18 May  
 b) 18 August  
 c) 18 December  
 d) 18 January

92. Q86: The climatic conditions involves\_\_\_\_

1. Temperature
2. Humidity
3. Rainfall

*Mark only one oval.*

- a) Only 1 and 2  
 b) Only 1 and 3  
 c) Only 2 and 3  
 d) All 1, 2 and 3

93. Q87: The substances which are added to the soil in the form of nutrients for the healthy growth of plants is/are called\_\_\_\_\_.

*Mark only one oval.*

- a) Fertilisers
- b) Manure
- c) Manure and Fertilisers.
- d) None of these

94. Q88: Consider the following statements related to viruses.

1- Viruses reproduce only inside the cells of the host organism, which may be a bacterium, plant or animal.

2- Common ailments like cold, influenza (flu) and most coughs are caused by viruses.

3- Serious diseases like polio and chicken pox are also caused by viruses.

Which of these statements is/are correct?

*Mark only one oval.*

- a) Only 1 and 2
- b) Only 2 and 3
- c) Only 1 and 3
- d) All 1,2 and 3

95. Q89: Consider the following statements related to curd.

1. Curd contains several microorganisms.

2. The bacterium Lactobacillus promotes the formation of curd.

Which of these statements is/are correct?

*Mark only one oval.*

- a) Only 1
- b) Only 2
- c) Both 1 and 2
- d) Neither 1 nor 2

96. Q90: The fibre \_\_\_\_\_ is also called as artificial silk.

*Mark only one oval.*

- a) Nylon
- b) Rayon
- c) Cotton
- d) Indigo

97. Q91: Consider the following statements.

1- The property of metals by which they can be beaten into thin sheets is called malleability.

2- The property of metal by which it can be drawn into wires is called ductility.

Which of these statements is/are correct?

*Mark only one oval.*

- a) Only 1
- b) Only 2
- c) Both 1 and 2
- d) Neither 1 nor 2

98. Q92: Metals produce ringing sounds, they are said to be\_\_\_\_\_.

*Mark only one oval.*

- a) Sonorous
- b) Lustrous
- c) Non-metals
- d) Brittle

99. Q93: Consider the following pairs.

1- Coke- is a tough, porous and black substance.

2- Coal Tar- is a black, thick liquid with unpleasant smell.

3- Coal Gas - is obtained during the processing of coal to get coke.

Which of these pairs is/are correctly matched?

*Mark only one oval.*

a) Only 1 and 2

b) Only 2 and 3

c) Only 1 and 3

d) All 1,2 and 3

100. Q94: Which elements are present in the molecule of ethanol?

*Mark only one oval.*

a) Only C and H

b) Only C and O

c) Only C, H and O

d) Only C, H and N

101. Q95: Consider the following list:

1. CNG

2. LPG

Which of the items in the above list can be considered as fuel for electric vehicle?

*Mark only one oval.*

a) Only 1

b) Only 2

c) Both 1 and 2

d) Neither 1 nor 2

102. Q96: Consider the following statements:
1. The increase in temperature on the earth disturbs the water cycle and may reduce rainfall. This could cause droughts.
  2. Deforestation leads to a decrease in the water holding capacity of the soil.
- Which of these statements is/are correct?

*Mark only one oval.*

- a) Only 1
- b) Only 2
- c) Both 1 and 2
- d) Neither 1 nor 2

103. Q97: The plants and animals found in a particular area are termed \_\_\_\_\_ of that area respectively.

*Mark only one oval.*

- a) Flora and Fauna
- b) Fauna and Flora
- c) Flora
- d) Fauna

104. 98: \_\_\_\_\_ is a unit of inheritance in living organisms.

*Mark only one oval.*

- a) Golgi complex
- b) Cytoplasm
- c) Gene
- d) Mitochondria

105. Q99: For producing a given intensity of light, LED bulbs consumes less electricity as compared to \_\_\_\_\_

*Mark only one oval.*

- a) Incandescent bulbs and Fluorescent tubes only
- b) Fluorescent tubes and CFLs only
- c) CFLs and Incandescent bulbs only
- d) All Incandescent bulbs, Fluorescent tubes and CFLs

106. 100: Consider the following statements .

1. The state of motion of an object is described by its speed and the direction of motion.

2. The state of rest is considered to be the state of zero speed.

Which of these statements is/are correct?

*Mark only one oval.*

- a) Only 1
- b) Only 2
- c) Both 1 and 2
- d) Neither 1 nor 2

---

This content is neither created nor endorsed by Google.

Google Forms



Sipna Shikshan Prasarak Mandal, Amravati  
Arts, Science and Commerce College, Chikhaldara  
**Career Guidance Cell**  
(Career Counseling and Guidance Cell)  
(2023-2024)

## Essay Test

### REPORT

*Objective:* To improve writing skill of students

*Date & Time:* 09.02.2024/04.00 to 05.00 pm

*Participants:* 48

*Question Paper:* Title in words and picture is given.

*Toppers:* First- Suresh Devidas Zombade (B.Sc. II)  
Second- Akshay B. Kasdekar (B.Sc. II)  
Third- Deep Borkar (B.Sc. III)

*Awards:* Trophies for Toppers and Cash Prize

*Documents:* Answer Sheets  
Attendance



Dr. D.S. HEDA OO  
CO-ORDINATOR

**CAREER GUIDANCE CELL**

ESTD : 2003

Arts, Science and Commerce College  
Chikhaldara



Dr. R.S. JAIPURKAR

**PRINCIPAL**

Arts, Science & Commerce College  
Chikhaldara

# Notice - 05

Page No.

Date

15 01 2024

All the teachers and students, hereby informed that following activities are arranged as per given schedule.

Sr.No.	Activity	Date	Time
01	G.K. Test	21.01.2024	01.00 - 2.00 pm
02	Science Aptitude Test	21.01.2024	02.00 - 3.00 pm
03	Essay Test.	<del>22.01.2024</del> 09.02.2024	<del>12.15 - 1.15 pm</del> 04.00 - 5.00 pm.


Please Note:

- G.K. Test <sup>Science Aptitude Test</sup> will be conducted online through Google form.
- Essay Test will be conducted offline.

All the students are expected to appear for these activities and all the teachers are requested to co-operate for the related work.

- Teachers have to send Google form Link of G.K. Test & Science Aptitude Test to their 'Palya students'.

The links of these tests will be uploaded on "ASC Chikhaldara" WhatsApp group and you have to send these to your 'Palya students'.

  
CO-ORDINATOR

**CAREER GUIDANCE CELL**

ESTD : 2003

Arts, Science and Commerce College  
Chikhaldara

M/L

**PRINCIPAL**  
Arts, Science & Commerce  
College, Chikhaldara

Sipna Shikshan Prasarak Mandal Amravati's  
ARTS, SCIENCE AND COMMERCE COLLEGE, CHIKHALDARA  
CAREER GUIDANCE CELL  
(Career Guidance and Counseling Cell)  
(2023-2024)

**ESSAY TEST**  
**ATTENDANCE**

Date: 09.02.2024

Sr. No.	Name of Student	Signature
01	Yash N. Gaurkhede	<u>Gaurkhede</u>
02	Abhishek J. Kasdekar	<u>Abhishek</u>
03	Sham R. Bethe	<u>Bethe</u>
04	Rajesh shirpal Belsare	<u>Bhulhara.</u>
05	Nitesh onkar Kasdekar	<u>Kasdekar</u>
06	pawan S. marwaskar	<u>Marwaskar</u>
07	Akshay B. Kasdekar	<u>Akshay</u>
08	pawan D. kale	<u>Kale</u>
09	Shwetal So Shahare	<u>Shahare</u>
10	Nikita V. Bhise	<u>Bhise</u>
11	Divya D. Sangele	<u>Sangele</u>
12	Manisha M. selakar	<u>Selakar</u>
13	Bhumika C. Gondole	<u>Bgondole</u>
14	Kalpna S. Bhusum	<u>Bhusum</u>
15	Samikeba kale	<u>Kale</u>
16	Shruti P. Raikumar	<u>Shruti</u>
17	Ku. Triveni R. Girohe	<u>Girohe</u>
18	Karina R. Jamunkar	<u>Karina</u>
19	Niemala K. Bhilavkar	<u>Niemala</u>
20	Dipali R. Chatur	<u>Dipali</u>
21	Mamta R. Kasdekar	<u>Mamta</u>
22	Sandhya S. Birve	<u>Birve</u>
23	Dipesh V. Lakade	<u>Lakade</u>
24		
25		
26		
27		
28		
29		
30		


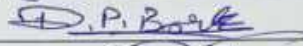




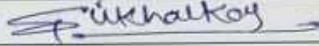



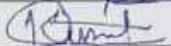

Total : 23 + 12 + 13 = 48



Sipna Shikshan Prasarak Mandal Amravati's  
ARTS, SCIENCE AND COMMERCE COLLEGE, CHIKHALDARA  
CAREER GUIDANCE CELL  
(Career Guidance and Counseling Cell)  
(2023-2024)

**ESSAY TEST**  
**ATTENDANCE**

Date: 09.02.2024

Sr. No.	Name of Student	Signature
01	Nitesh N. Bhatkar	
02	Deep. P. Borkar	
03	Rahul A. Kasdekar	
04	Yash K. Sankar	
05	Raj G. Khulke	
06	Suresh. D. Zombade	
07	Shoipad. D. Chikhalkar	
08	Satyadev G. Patilkar	
09	Akash R. Dhikar	
10	Gemaji R. Kasdekar	
11	Kunal. N. Mawankar	
12	Sonali. D. Kasdekar	
13		
14		
15		
16		
17		
18		
19		
20		
21		
22		
23		
24		
25		
26		
27		
28		
29		
30		



Sipna Shikshan Prasarak Mandal Amravati's  
ARTS, SCIENCE AND COMMERCE COLLEGE, CHIKHALDARA  
CAREER GUIDANCE CELL  
(Career Guidance and Counseling Cell)  
(2023-2024)

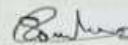

**ESSAY TEST**  
**ATTENDANCE**

Date: 09-02-2024

Sr. No.	Name of Student	Signature
01	Ku. Sakshi Ravi Vag	Sakshi
02	Ku. Dipali S. Kute	Dipali
03	Ku. Komal S. Dhande	Komal
04	Ku. Rachika Ankar Sharma	Rachika
05	Ku. Rajshri Bishram Kasdekar	Rajshri
06	Ku. Yogita Lalman Belsare	Yogita
07	Ku. Sanjana Chaitram Muvaskar	Sanjana
08	Ku. Komal S. Dhikar	Komal
09	Ku. Daraj M. Dhurve	Daraj
10	Ku. Buman B. Dhande	Buman
11	Ku. Sushila G. Belsare	Sushila
12	Ku. Karishma G. Kasdekar	Karishma
13	Rupa M. Bhilavekar	Rupa
14		
15		
16		
17		
18		
19		
20		
21		
22		
23		
24		
25		
26		
27		
28		
29		
30		



First.

Suresh . P. Zombade	2nd		
Name of Student	Class	Signature of Student	Signature of Invigilator

Sipna Shikshan Prasarak Mandal Amravati's  
ARTS, SCIENCE AND COMMERCE COLLEGE, CHIKHALDARA

### CAREER GUIDANCE CELL

(Career Guidance and Counseling Cell)  
(2023-2024)

### ESSAY TEST

Date: \_\_\_\_ .02.2024/Time: 01 Hour

Note: 1. All the questions are compulsory

Marks Obtained: \_\_\_\_

2. The medium of answer may be in Hindi, English or Marathi


Maximum Marks: 20

Q1: Write an essay on the topic "Education System Reforms".

(10 Marks)

07  
There is a very thought-provoking statement which says 'Education is the most powerful weapon which you can use to change the world'. by mark twain. education is basic human right. as far as our indian national education policy is concerned, we need many more drastic changes in our education policy, our education is getting theory-based over the time. practical knowledge of students is damaged due to this concept. as we can see the suicidal rates in india among teenagers is growing rapidly. and the only reason behind is unwanted educational pressure. so before claiming the changes we should focus on that factor as well. In today's time knowledge oriented education is the need of an hour, many european countries has introduced this concept 100 of years before. but we as a country failed in that regard, our teachers also teaches us in theory and bookish information. we don't know the concept but because we are going to get some marks so we just learn and they gave us few marks. we don't even care about the knowledge. so in my opinion our national policy should more focus on knowledge rather than just marks which can make good future....

07



Q2. Write an essay on the topic given in the form of picture.




(10 Marks)



05  
06

The above picture shows the new parliament house of India which is situated in New Delhi. It houses the both Lok Sabha and Rajya Sabha. As a part of Central Vista Redevelopment project, a new parliament building was constructed in New Delhi. The inauguration date is 28 May 2023 by our Prime Minister Narendra Modi. The new parliament house was first used for official business on 19th September 2023 during the parliament special session, with the name designation parliament. The old parliament architecture built in 1927 was designed by British architects. The new complex has a hexagonal shape and it is built next to existing complex and is almost equal to the former one. The design of this parliament building resembles the Vijaya temple of Vidisha.

07

Paper Valuer	Signature	Marks Obtained	Mean
Dr. U.G. Tayde (Coordinator)		13	$\frac{39}{3} = 13.00$
Dr. A.V. Dudul (Member)		12	
Dr. A. R. Bakshi (Member)		14	





Sipna Shikshan Prasarak Mandal, Amravati's  
**ARTS, SCIENCE & COMMERCE COLLEGE, CHIKHALDARA**  
**CAREER GUIDANCE CELL**

(Career Guidance & Counseling Cell)  
(2023-2024)

**'ESSAY TEST'**

Date: 09<sup>th</sup> Feb., 2024

Time: 04.00-05.00 pm

**CERTIFICATE OF EXCELLENCE**

This is to certify that Suresh Zombade Class B.Sc.II

has successfully participated in COLLEGE LEVEL 'ESSAY TEST' organized by Career Guidance Cell,

Arts, Science and Commerce College, Chikhaldara for all the students of the college and he/she stood

first in the competition. Congratulations!

**Dr. D.S. Hedaoo**  
Coordinator  
Career Guidance Cell

**Dr. R.S. Jaipurkar**  
Principal  
Arts, Science and Commerce College,  
Chikhaldara